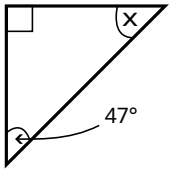




Angles - set samples - paper 1

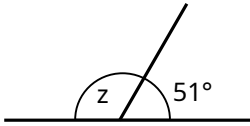
Note, angles are not drawn to scale

1. What is the size of angle x?



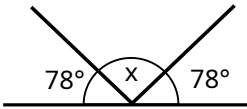
ans _____

2. What is the size of angle z?



ans _____

3. What is the size of angle x?



ans _____



Angles - set samples - Answers

1. 43°
2. 129°
3. 102°